


Prénom _____

Numération

Objectifs: Dénombrer de 1 à 17 .

Se repérer sur une bande numérique



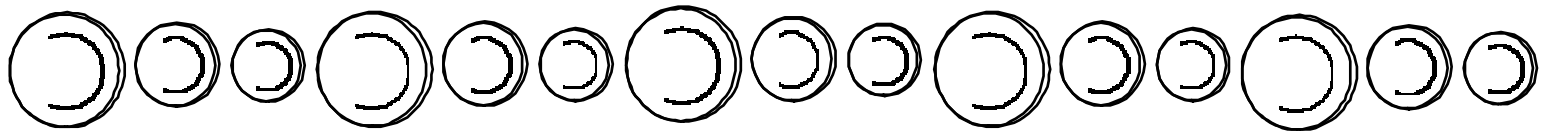
1 2 3 4 5 6 7 8 9 10 11 12 13 14 15 16 17



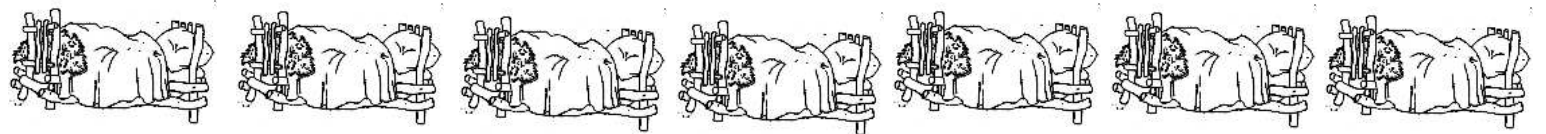
1 2 3 4 5 6 7 8 9 10 11 12 13 14 15 16 17



1 2 3 4 5 6 7 8 9 10 11 12 13 14 15 16 17




1 2 3 4 5 6 7 8 9 10 11 12 13 14 15 16 17



1 2 3 4 5 6 7 8 9 10 11 12 13 14 15 16 17



1 2 3 4 5 6 7 8 9 10 11 12 13 14 15 16 17



1 2 3 4 5 6 7 8 9 10 11 12 13 14 15 16 17